

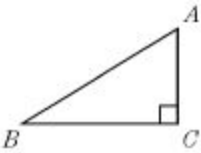


Monday	Tuesday	Wednesday	
<p>Which is cheaper? 20% off the original price of \$19.99 or 10% off its original price of \$17 for a book?</p>	<p>I will teach this live every Taco Tuesday @ 10 text me for help You will get one Math grade per. week.....</p>	<p>What is 45% of 748?</p>	
<p>Graph the inequality on a number line: $-2 > m$</p> 		<p>Write an inequality that represents the graph below:</p> 	
<p>In right triangle $\triangle ABC$, $m\angle A = 42^\circ$. Find $m\angle B$.</p> 	<p>Which set of numbers may represent the lengths of the sides of a triangle?</p> <p>A) 1, 3, 4 B) 4, 4, 9 C) 5, 7, 9 D) 8, 5, 3</p>		
<p>A circle has a diameter of 29 feet. What is the area?</p>			
			<p>?</p>

My Work

Monday	Tuesday
Wednesday	Thursday

My Progress

MONDAY	TUESDAY	WEDNESDAY	THURSDAY
# of questions _____	# of questions _____	# of questions _____	# of questions _____
# correct _____	# correct _____	# correct _____	# correct _____
I need more help	I need more help	I need more help	I need more help
with... _____	with... _____	with... _____	with... _____
_____	_____	_____	_____
_____	_____	_____	_____
_____	_____	_____	_____
_____	_____	_____	_____
_____	_____	_____	_____
_____	_____	_____	_____

